

ST. THOMAS SCHOOL, LONI

SESSION 2021-22

CLASS -I- _____

WORKSHEET-4

Name: _____ Date: _____ Roll No: _____

Note: Last date of submission through MST is 05-01-2022.
Sharing in word and pdf file. You can submit as a soft copy also.

SUBJECT-ENGLISH

Section -A (Comprehension)

Q.1. Look at the picture and make sentences with the help of words given in the help box.



Christmas, tree, behind , Santa Claus, brings , gifts, snowman , celebrating, smiling

- a) This is a picture of Santa Claus.
- b) _____
- c) _____
- d) _____

Q.2. Read the passage given below and answer the questions:

Christmas falls on 25th December in the whole world. Jesus Christ was the true reflection of forgiveness. People sing, dance, and meet each other during Christmas. People also offer gifts to friends and relatives. Children enjoy the day of Christmas in the most exciting manner. Children wait for Santa Clause to visit their house. Santa drops gifts for the children in the middle of the night. We go on a picnic with family and friends during the holiday. We go out to shop for a Christmas tree with our family. We should celebrate Christmas with love.

a) When do we celebrate Christmas?

Ans. _____.

b) Write the antonyms of the given words from the passage:

- i. day –
- ii. false –
- iii. enemy –
- iv. come –
- v. out –
- vi. hate –


c) Make sentences:

- i. Santa Claus - _____.
- ii. December - _____.


SUBJECT-MATHEMATICS

Name: _____ Date: _____ Roll No: _____


Q.1. Fill in the missing numbers.





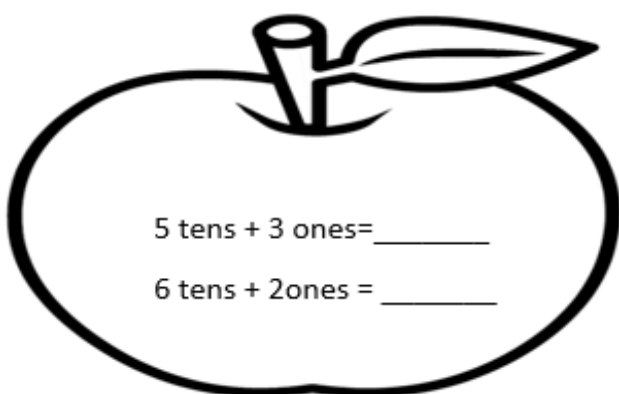
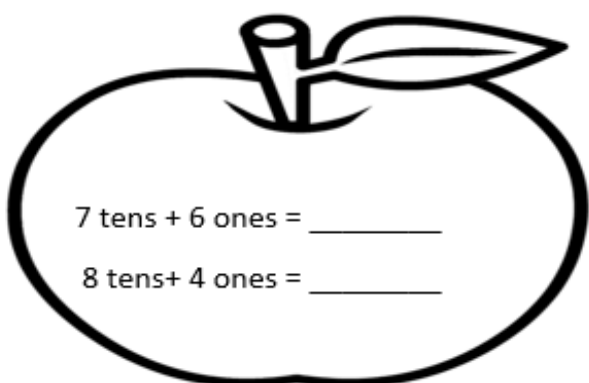
Q.2. Colour the below picture as indicated.



Q.3. Circle the five differences in the picture given below .



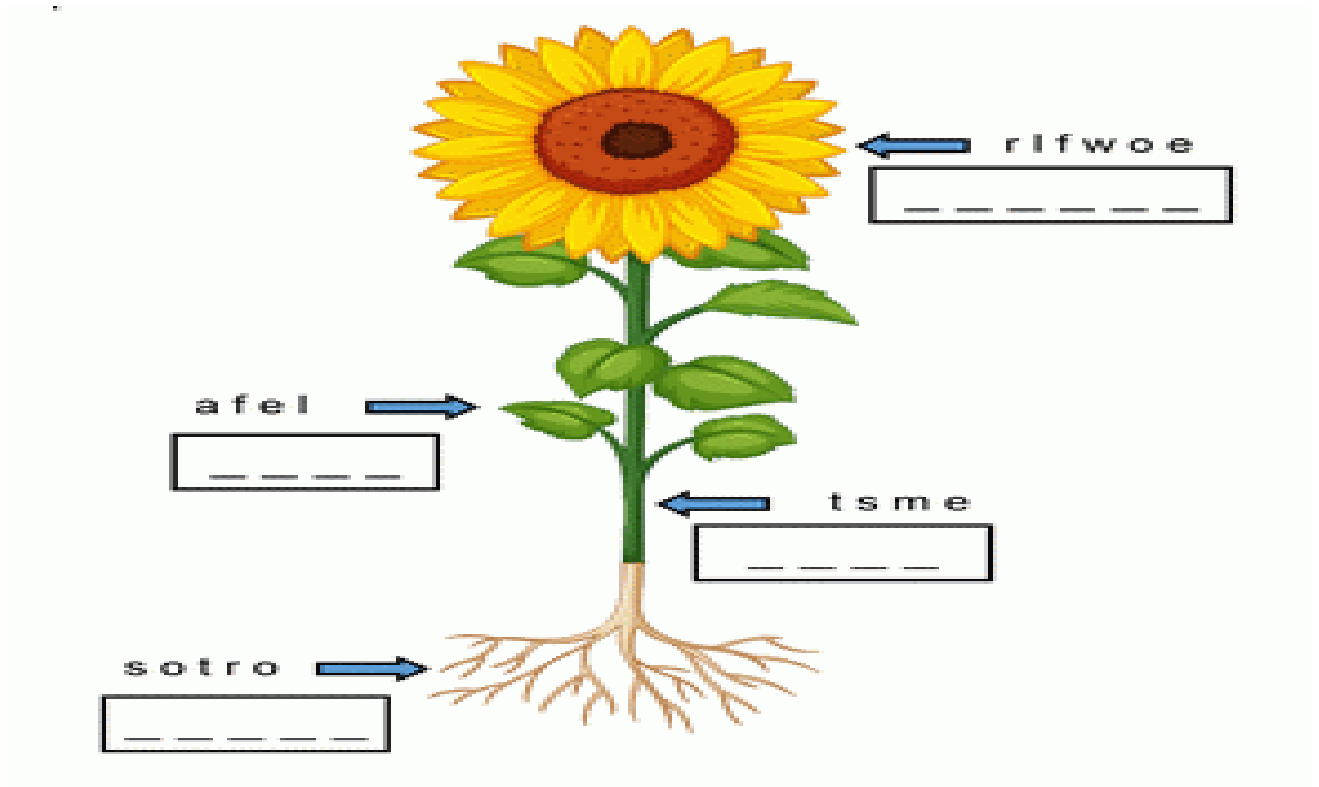
Q.4. Do as directed.








SUBJECT-EVS

Name: _____ Date: _____ Roll No: _____

Q.1. Unscramble the letters and write name of the different parts of a plant.



Q.2. Match the following.

	◆	◆	vegetables
	◆	◆	flowers
	◆	◆	grass
	◆	◆	plants
	◆	◆	trees

Q.3. Search and circle the given words in the picture.

ROOTS
STEM
LEAVES
WATER
FLOWER
LIGHT
WARMTH
SUN
FOOD

Q.4. Draw, colour and label any two things that we get from plants.

<hr/>	<hr/>
-------	-------

विषय- हिन्दी

नाम: _____ दिनांक: _____ क्रमांक: _____

प्रश्न-1. दिए गए चित्र पर दो पंक्तियाँ लिखिए।



i. _____

ii. _____

प्रश्न-2. रिक्त स्थान भरिए।

i. मेरा नाम _____ है।

ii. मेरी आयु _____ वर्ष है।

iii. मैं कक्षा _____ में पढ़ता / पढ़ती हूँ।

iv. मैं _____ में रहता / रहती हूँ।

v. मेरे विद्यालय का नाम _____ है।

प्रश्न-3. नीचे दिए चित्रों का नाम लिखिये।



i. _____



ii. _____



iii. _____



iv. _____

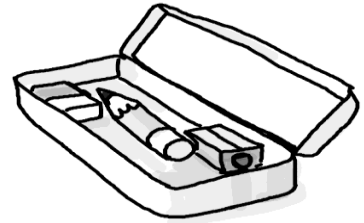
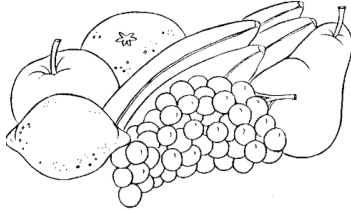
SUBJECT-COMPUTER

Name: _____ Date: _____ Roll No: _____



Note: -Solve the following question in your Computer notebook.

Q.1. Match the things with their respective storage space.

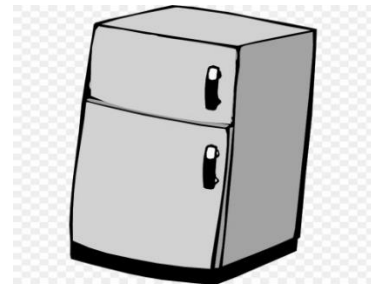
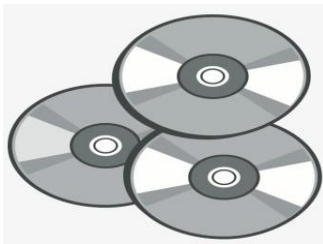
1.



2.



3.



4.



5.



Q.2. Who am I?

A. I have a neck but no head and is used to store water but still it wears a cap.

Ans. _____

B. I am a small device used to store and transfer the data.

Ans. _____

C. I begin with a letter T and end with a letter T. Mostly I am full of Tea.

Ans. _____

D. You open up the big door in your house to keep a car or bike.

Ans. _____