

**ST. THOMAS SCHOOL, LONI**

**Practice Sheet -3 (2019-20)**

**Subject – MATH**

**Class – I-\_\_\_\_\_**

**Name: \_\_\_\_\_ Roll No.: \_\_\_\_\_ Date: \_\_\_\_\_**

**Complete it and paste it in Maths notebook. Bring on 25.11.19**

**Q1. Do as directed:**

- (a) 3 Tens + 5 Ones =  (b) 4 more than 26 =   
(c) 5 less than 40 =  (d) 25 and 3 make =   
(e) 6 taken away from 47 =   
(f) What comes before 50?

**Q2. Write the numbers:**

- (a)  $20 + 7 =$  \_\_\_\_\_  
(b) 3 Tens + 4 Ones = \_\_\_\_\_  
(c) 4 Tens + 6 Ones = \_\_\_\_\_  
(d) \_ Tens + \_ Ones = 49

**Q3. Write in expanded form:**

- (a)  $26 =$  \_\_\_ Tens + \_\_\_ Ones   (b)  $37 =$  \_\_\_ Tens + \_\_\_ Ones    
(c)  $50 =$  \_\_\_ Tens + \_\_\_ Ones   (d)  $48 =$  \_\_\_ Tens + \_\_\_ Ones

**Q4. Write the missing number:**

- a) 43, \_\_\_\_, 45, \_\_\_\_, 47, \_\_\_\_, 49, \_\_\_\_.  
b) 20, \_\_\_\_, 18, \_\_\_\_, 16, \_\_\_\_, 14, \_\_\_\_.

**Q5. What comes before/after/between?**

	T	O	X	T	O	X	T	O
a)	___	___		2	2		2	3
b)	___	___		3	1		3	2
c)	3	8		3	9		___	___
d)	4	4		4	5		___	___
e)	3	9		___	___		4	1
f)	4	8		___	___		5	0

**Q6 Addition.**

**Solve:**

(a)	T	O	(b)	T	O	(c)	T	O	(d)	T	O	
		4			7							
	+	2		+	2		3	7		5	2	
	+	1		+	0		+	1	4	+	1	9

**Q7 Story sums:**

a) Rahul has 18 pencils; Diya has 13 pencils. How many pencils do they have all together?

	T	O

**Answer:** ..... pencils.


**Q 8. Dodging tables:**

					<b>T</b>	<b>O</b>
a)	4	X	2	=		
b)	4	X	8	=		
c)	5	X	6	=		





**Q 9. Complete the patterns:**

11	22	33	44	—	—	—
AA	BB	BB	AA	—	—	—
→	↑	→	↑	—	—	—
☆	😊	😊	☆	—	—	—

**Q 10. Data Handling:**



Count the shapes in the above picture.

**Name the shapes:**

a) Which shape is maximum in number?

b) Which shape is minimum in number?