

ST.THOMAS SCHOOL, LONI


PRACTICE WORKSHEET (December)


SUB: Mathematics


CLASS-III-__


Name: _____ Roll No.: _____ Date: _____


Q.1 Divide:


 $16 \div 2 = \quad$


 $36 \div 4 = \quad$


 $27 \div 3 = \quad$

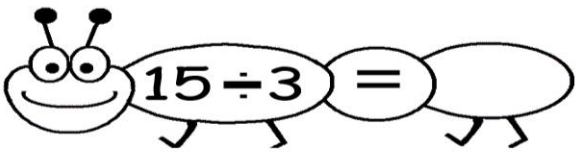
 $24 \div 3 = \quad$

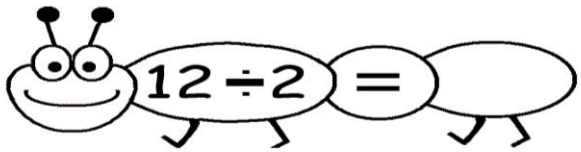
 $10 \div 2 = \quad$


 $14 \div 2 = \quad$


 $12 \div 3 = \quad$


 $21 \div 3 = \quad$


 $15 \div 3 = \quad$

 $12 \div 2 = \quad$

 $8 \div 2 = \quad$

 $28 \div 4 = \quad$

 $18 \div 3 = \quad$

 $32 \div 4 = \quad$

Q.2 Find Quotient:

$$7 \overline{)385}$$

$$9 \overline{)621}$$

$$3 \overline{)99}$$

$$9 \overline{)378}$$

$$5 \overline{)175}$$

$$7 \overline{)616}$$

$$5 \overline{)320}$$

$$5 \overline{)150}$$

$$4 \overline{)148}$$