

ST. THOMAS SCHOOL, LONI

PRACTICE SHEET -2 (2019-20)

Subject – Math

Class – I - __

Name: _____ **Date:** _____ **Roll No:** _____

Note: Complete and paste it in Maths notebook. Bring it on 18.09.19.

Q1. Write in expanded form:

(a) $17 = \underline{\quad}$ Ten + $\underline{\quad}$ ones

(b) $10 = \underline{\quad}$ Ten + $\underline{\quad}$ ones

Q2. Do as directed:

a) 1 Ten + 3 ones =

=

b) $3 + 6 =$

=

c) 2 less than 13 =

=

d) 7 and 2 make =

=

e) Write the number names:

1) $13 =$ _____

2) $11 =$ _____

3) $20 =$ _____

4) $18 =$ _____

f) Counting in 3's, write the next number:

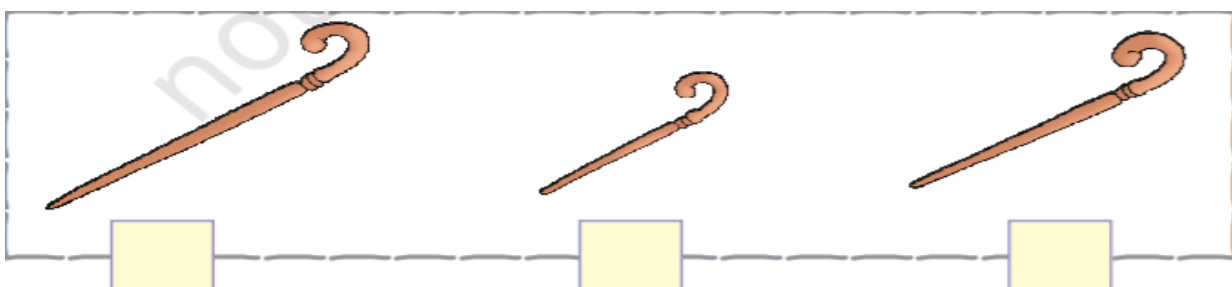
3	6	9		
---	---	---	--	--

Q3 Out of 4 berries, 1 is eaten by the baby. Find the number of berries which are left?

T	O

Answer. _____ berries

Q4. Circle the shortest object:



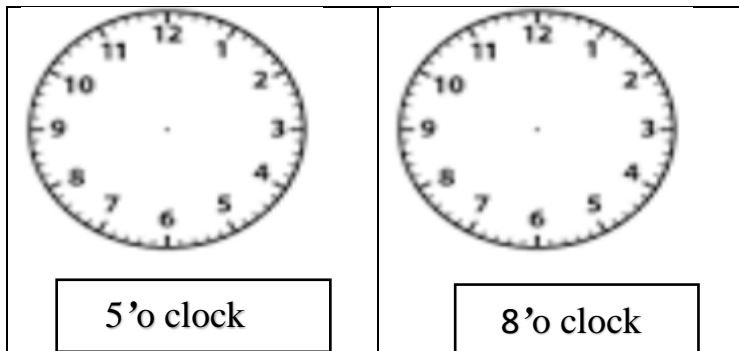
Q5. Solve the sums:

a)	T	O
	1	3
	+	0
d)	T	O
	1	4
	-	2


b)	T	O
	1	1
	+	5
e)	T	O
	1	9
	-	5

c)	T	O
	1	7
	+	2
f)	T	O
	1	6
	-	4

Q6 a) Draw the hour hand and the minute hand in the given clocks:



b) Write the time in the given clocks:



Q7. What comes before/after/between:

	T	O	X	T	O	X	T	O
a)	1	3		1	4		—	—
b)	1	7		—	—		1	9
c)	1	1		—	—		1	3
d)	—	—		1	9		2	0