

ST. THOMAS SCHOOL, LONI

SESSION 2019-20

Class – I - ____

Worksheet – 3

Name _____ Date: _____ Roll No: _____

Note: Complete it and paste it in EVS notebook.

Date of Submission- 30th Oct, 2019

English

Q1 Read the given paragraph and answer the following questions:

Anya's class went to the school carnival today. It was a lot of fun. Anya won two prizes. She won a blue balloon and a toy car. She had a great time with all of her friends. First, she played a few games. She ate popcorn and lemonade with her friends. Finally, she got to watch a magic show. Anya can't wait to get home and tell her parents all about her fun day!

1. Where did Anya's class go?

Ans1. Anya's class went to _____

2. What did Anya win?

Ans2. Anya won a _____

3. What did she do first?

Ans3. First, she played _____








4. What did Anya eat at the carnival?

Ans4. _____

EVS

Clothes we wear

Q2.Fill in the blanks:-

1.  This is a _____(t i h r s)
2.  This is a pair of _____(n e a s j)
3.  This is a _____(w t s e a r e)
4.  This is a _____(r u s e r o t)
5.  This is a _____(t r k s i)
6.  This is a _____(s u b o l e)
7.  This is a _____(s e s r d)

Math

- Do pages 56, 57 and 58 of Magic-Support (CCE Drill – 1)

Q3. Write the number:

1. $30 + 2 =$ _____
2. $60 + 7 =$ _____
3. $70 + 1 =$ _____
4. $10 + 9 =$ _____
5. 2 tens + 3 ones = _____
6. 4 tens + 6 ones = _____
7. 1 ten + 8 ones = _____
8. 5 tens + 9 ones = _____