

ST. THOMAS SCHOOL, LONI  
Practice Worksheet (October)

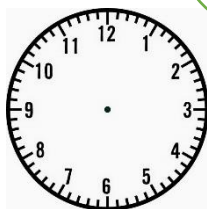
Subject- Mathematics

Class-III- \_\_\_\_

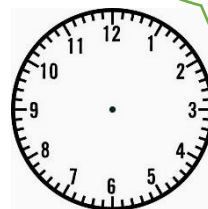
Name: \_\_\_\_\_ Roll No. \_\_\_\_\_ Date: \_\_\_\_\_

Note: Date of submission is 1.11.2019

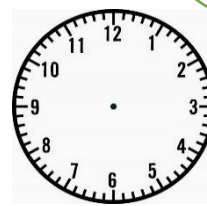
Q.1 What does the Clock say?



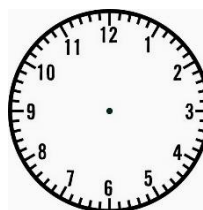
30 minutes  
past 6



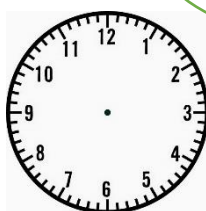
My hour hand is on  
1, my minute hand is  
on 12.



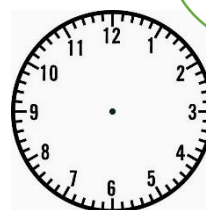
Quarter to 12



Quarter past 5



My hour hand is on  
5, my minute hand  
is on 8.



45 minutes  
past 11

Q.2 Solve the given word problems:

(a) I went to school at 8.00 a.m and came back at 2.00 p.m. How much time did I spend in the school?

---

---

---

---

(b) How many hours are there in 9 days?

---

---

---

---

(c) Suchi went to park at 4.30p.m. and came back at 6.30p.m. How much time did she spend in the park?

---

---

---

---